



What time is it?



It's nine o'clock.

**9:00**




It's twelve o'clock.

**12:00**



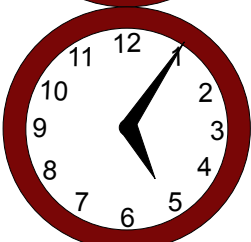
It's half past three.

**3:30**




It's quarter past eleven.

**11:15**




It's five past five.

**5:05**




It's quarter to ten.

**9:45**



It's ten to six.

**5:50**



It's twenty-five to four.

**3:35**